

MATH 218D-1
PRACTICE MIDTERM EXAMINATION 1

Name		Duke NetID	
-------------	--	-------------------	--

Please **read all instructions** carefully before beginning.

- Do not open this test booklet until you are directed to do so.
- You have 75 minutes to complete this exam.
- If you finish early, go back and check your work.
- The graders will only see the work on the **printed pages** (front and back). You may use other scratch paper, but the graders will not see anything written there.
- You may use a **simple calculator** for doing arithmetic, but you should not need one. You may bring a **3 × 5-inch note card** covered with anything you want. All other materials and aids are strictly prohibited.
- For full credit you must **show your work** so that your reasoning is clear, unless otherwise indicated.
- Do not spend too much time on any one problem. Read them all through first and attack them in an order that allows you to make the most progress.
- Good luck!

This is a practice exam. It is meant to be similar in format, length, and difficulty to the real exam. It is **not** meant as a comprehensive list of study problems. I recommend completing the practice exam in 75 minutes, without notes or distractions.

[This page intentionally left blank]

Problem 1.

[15 points]

a) Find the LU decomposition of this matrix:

$$A = \begin{pmatrix} -2 & 2 & 1 \\ 4 & -1 & 1 \\ -6 & 12 & 11 \end{pmatrix}.$$

$$L = \begin{pmatrix} & & \\ & & \\ & & \end{pmatrix} \quad U = \begin{pmatrix} & & \\ & & \\ & & \end{pmatrix}$$

b) Express the matrix L that you computed above as a product of three elementary matrices.

$$L = \begin{pmatrix} & & \\ & & \\ & & \end{pmatrix} \begin{pmatrix} & & \\ & & \\ & & \end{pmatrix} \begin{pmatrix} & & \\ & & \\ & & \end{pmatrix}$$

[Scratch work for Problem 1]

(Problem 1, continued)

c) Compute L^{-1} .

$$L^{-1} = \begin{pmatrix} & & & & \\ & & & & \\ & & & & \\ & & & & \\ & & & & \end{pmatrix}$$

d) Explain why a computer would probably compute a $PA = LU$ decomposition, beginning with the row swap $R_1 \longleftrightarrow R_3$.

e) Given the decomposition

$$\begin{pmatrix} 0 & 0 & 0 & 1 \\ 0 & 1 & 0 & 0 \\ 0 & 0 & 1 & 0 \\ 1 & 0 & 0 & 0 \end{pmatrix} \begin{pmatrix} 0 & 2 & -8 & -5 \\ -1 & -5 & 2 & 0 \\ 2 & 0 & 3 & 2 \\ -1 & -3 & 0 & -1 \end{pmatrix} = \begin{pmatrix} 1 & 0 & 0 & 0 \\ 1 & 1 & 0 & 0 \\ -2 & 3 & 1 & 0 \\ 0 & -1 & 2 & 1 \end{pmatrix} \begin{pmatrix} -1 & -3 & 0 & -1 \\ 0 & -2 & 2 & 1 \\ 0 & 0 & -3 & -3 \\ 0 & 0 & 0 & 2 \end{pmatrix},$$

solve the equation

$$\begin{pmatrix} 0 & 2 & -8 & -5 \\ -1 & -5 & 2 & 0 \\ 2 & 0 & 3 & 2 \\ -1 & -3 & 0 & -1 \end{pmatrix} x = \begin{pmatrix} 7 \\ -7 \\ 2 \\ -4 \end{pmatrix}.$$

$$x = \begin{pmatrix} \\ \\ \\ \end{pmatrix}$$

[Scratch work for Problem 1]

Problem 2.

[20 points]

a) Compute the reduced row echelon form of the matrix

$$\begin{pmatrix} 1 & 3 & 4 & 1 \\ -3 & -9 & -6 & -1 \\ 2 & 6 & 2 & 1 \end{pmatrix}.$$

Be sure to write down all row operations that you perform.

$$\text{RREF: } \left(\begin{array}{cccc} & & & \\ & & & \\ & & & \end{array} \right)$$

Now we switch matrices to avoid carry-through error. Consider the matrix A and its reduced row echelon form:

$$A = \begin{pmatrix} 1 & -1 & 4 & -10 & 1 \\ -3 & 3 & -1 & -3 & -1 \\ 2 & -2 & 2 & -2 & 1 \end{pmatrix} \xrightarrow{\text{RREF}} \begin{pmatrix} 1 & -1 & 0 & 2 & 0 \\ 0 & 0 & 1 & -3 & 0 \\ 0 & 0 & 0 & 0 & 1 \end{pmatrix}.$$

b) Circle all of the free variables in the system $Ax = 0$:

$$x_1 \quad x_2 \quad x_3 \quad x_4 \quad x_5$$

c) Compute a basis for $\text{Nul}(A)$.

$$\text{basis: } \left\{ \begin{array}{c} \\ \\ \\ \end{array} \right\}$$

[Scratch work for Problem 2]

(Problem 2, continued)

d) Given the identity

$$A \begin{pmatrix} 1 \\ -3 \\ 1 \\ 0 \\ 2 \end{pmatrix} = \begin{pmatrix} 10 \\ -15 \\ 12 \end{pmatrix},$$

write the solution set of $Ax = (10, -15, 12)$ as a translate of a span.

$$\text{solution set: } \begin{pmatrix} \\ \\ \\ \\ \end{pmatrix} + \text{Span} \left\{ \begin{pmatrix} \\ \\ \\ \\ \end{pmatrix} \right\}$$

e) Compute a basis for $\text{Row}(A)$.

$$\text{basis: } \left\{ \begin{pmatrix} \\ \\ \\ \\ \end{pmatrix} \right\}$$

f) Compute a basis for $\text{Col}(A)$.

$$\text{basis: } \left\{ \begin{pmatrix} \\ \\ \\ \\ \end{pmatrix} \right\}$$

g) Compute a basis for $\text{Col}(A)$ consisting of vectors with all coordinates equal to 0 or 1.

$$\text{basis: } \left\{ \begin{pmatrix} \\ \\ \\ \\ \end{pmatrix} \right\}$$

h) Compute a basis for $\text{Nul}(A^T)$.

$$\text{basis: } \left\{ \begin{pmatrix} \\ \\ \\ \\ \end{pmatrix} \right\}$$

[Scratch work for Problem 2]

Problem 3.

[15 points]

The matrix

$$A = \begin{pmatrix} 1 & 2 & 4 \\ -1 & 1 & 5 \\ 2 & -1 & -7 \end{pmatrix} \text{ has null space } \text{Nul}(A) = \text{Span} \left\{ \begin{pmatrix} 2 \\ -3 \\ 1 \end{pmatrix} \right\}.$$

a) Find a linear relation among the columns of A .

$$\boxed{} \begin{pmatrix} 1 \\ -1 \\ 2 \end{pmatrix} + \boxed{} \begin{pmatrix} 2 \\ 1 \\ -1 \end{pmatrix} + \boxed{} \begin{pmatrix} 4 \\ 5 \\ -7 \end{pmatrix} = 0$$

b) $\text{rank}(A) = \boxed{}$

c) Which of the following sets form a basis for $\text{Col}(A)$? Circle all that apply.

$$\left\{ \begin{pmatrix} 1 \\ -1 \\ 2 \end{pmatrix}, \begin{pmatrix} 2 \\ 1 \\ -1 \end{pmatrix} \right\}, \quad \left\{ \begin{pmatrix} 1 \\ -1 \\ 2 \end{pmatrix}, \begin{pmatrix} 2 \\ -2 \\ 4 \end{pmatrix} \right\}, \quad \left\{ \begin{pmatrix} 1 \\ -1 \\ 2 \end{pmatrix}, \begin{pmatrix} 2 \\ 1 \\ -1 \end{pmatrix}, \begin{pmatrix} 4 \\ 5 \\ -7 \end{pmatrix} \right\},$$
$$\left\{ \begin{pmatrix} 1 \\ -1 \\ 2 \end{pmatrix}, \begin{pmatrix} 4 \\ 5 \\ -7 \end{pmatrix} \right\}, \quad \left\{ \begin{pmatrix} 2 \\ 1 \\ -1 \end{pmatrix}, \begin{pmatrix} 4 \\ 5 \\ -7 \end{pmatrix} \right\}, \quad \left\{ \begin{pmatrix} 1 \\ 0 \\ 0 \end{pmatrix}, \begin{pmatrix} 0 \\ 1 \\ 0 \end{pmatrix} \right\}$$

d) $\text{Row}(A)$ is a (circle one) point / line / plane / space in $\mathbf{R}^{\boxed{}}$.

e) Which of the following sets form a basis for $\text{Nul}(A^T)$? Circle all that apply.

$$\left\{ \begin{pmatrix} -1 \\ 5 \\ 3 \end{pmatrix}, \begin{pmatrix} 2 \\ -3 \\ 1 \end{pmatrix} \right\}, \quad \left\{ \begin{pmatrix} 1 \\ -1 \\ 2 \end{pmatrix}, \begin{pmatrix} 2 \\ 1 \\ -1 \end{pmatrix} \right\}, \quad \left\{ \begin{pmatrix} 2 \\ -3 \\ 1 \end{pmatrix} \right\},$$
$$\left\{ \begin{pmatrix} -1 \\ 5 \\ 3 \end{pmatrix} \right\}, \quad \left\{ \begin{pmatrix} 1 \\ -5 \\ -3 \end{pmatrix} \right\}, \quad \{\}$$

[Scratch work for Problem 3]

Problem 4.

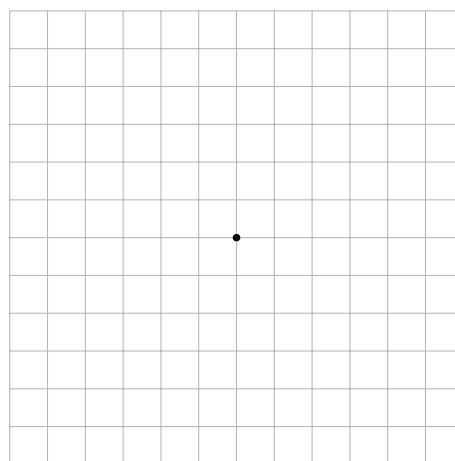
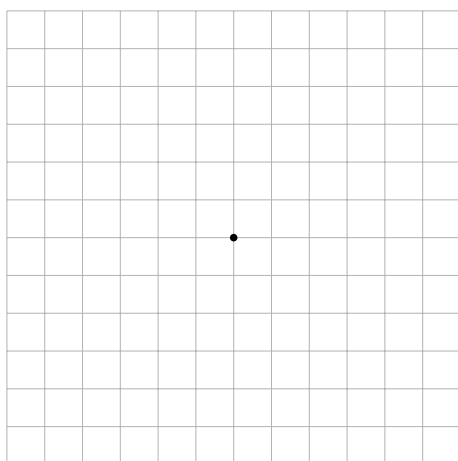
[10 points]

Consider the matrix $A = \begin{pmatrix} 2 & -3 \\ -4 & 6 \end{pmatrix}$.

a) Compute bases for all four fundamental subspaces of A .

$$\begin{array}{l} \text{Col}(A): \left\{ \begin{array}{c} \\ \\ \\ \end{array} \right\} \\ \text{Nul}(A^T): \left\{ \begin{array}{c} \\ \\ \\ \end{array} \right\} \end{array} \quad \begin{array}{l} \text{Row}(A): \left\{ \begin{array}{c} \\ \\ \\ \end{array} \right\} \\ \text{Nul}(A): \left\{ \begin{array}{c} \\ \\ \\ \end{array} \right\} \end{array}$$

b) Draw *and label* Row(A) and Nul(A) in the grid on the left, and Col(A) and Nul(A^T) in the grid on the right. Be precise!



c) Draw the solution set of $Ax = \begin{pmatrix} -4 \\ 8 \end{pmatrix}$ in the grid on the left.

[Scratch work for Problem 4]

Problem 5.

[20 points]

Short-answer questions: no justification is necessary unless indicated otherwise.

a) If A is a 5×2 matrix with full column rank, which of the following statements must be true about A ? Fill in the bubbles of all that apply.

- | | |
|---|--|
| <input type="radio"/> $\text{rank}(A) = 5$ | <input type="radio"/> $Ax = 0$ has a unique solution |
| <input type="radio"/> $\text{Col}(A)$ is a plane in \mathbf{R}^5 | <input type="radio"/> $\text{Nul}(A^T)$ is a plane in \mathbf{R}^5 |
| <input type="radio"/> $\text{Nul}(A) = \{ \}$ | <input type="radio"/> $\text{Row}(A) = \mathbf{R}^2$ |
| <input type="radio"/> $Ax = b$ has a unique solution for every $b \in \mathbf{R}^5$ | |

b) A certain 3×3 matrix A has null space equal to $\text{Span}\{(1, 1, 1)\}$. Which of the following sets is necessarily equal to the solution set of $Ax = b$ for some vector $b \in \mathbf{R}^3$? Fill in the bubbles of all that apply.

- | | |
|--|--|
| <input type="radio"/> $\text{Span}\{(1, 1, 1)\}$ | <input type="radio"/> $\{(t, t, 1) : t \in \mathbf{R}\}$ |
| <input type="radio"/> $\{ \}$ | <input type="radio"/> $\{(t, t, 1+t) : t \in \mathbf{R}\}$ |
| <input type="radio"/> $\{(1, 1, 1)\}$ | <input type="radio"/> $(11, 2, -1) + \text{Span}\{(1, 1, 1)\}$ |

c) Is this set a subspace?

$$V = \{(x, y, z) \in \mathbf{R}^3 : x^2 + z^2 = 0\}$$

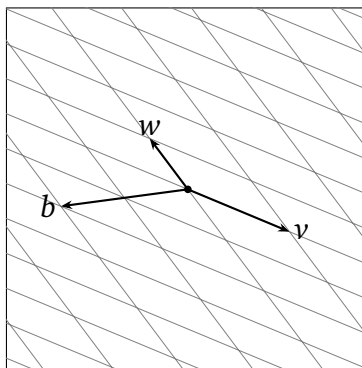
If so, express V as the null space or the column space of a matrix. If not, explain why not.

d) A certain 2×2 matrix

$$A = \begin{pmatrix} | & | \\ v & w \\ | & | \end{pmatrix}$$

has columns v and w , pictured below. Solve the equation $Ax = b$, where b is the vector in the picture.

$$x = \begin{pmatrix} \\ \end{pmatrix}$$



[Scratch work for Problem 5]

Problem 6.

[20 points]

In each part, either provide an example, or explain why no example exists. (No explanation is required if an example does exist.)

a) A 3×3 matrix whose row space and null space are both planes in \mathbf{R}^3 .

b) A nonzero 2×2 matrix whose column space is contained in its null space.

c) A 3×3 matrix A such that $\dim \text{Col}(A) = \dim \text{Nul}(A)$.

d) A 3×3 matrix of rank 2 whose null space is equal to its left null space.

[Scratch work for Problem 6]